


# Divide by 8

1 Complete the sentences.

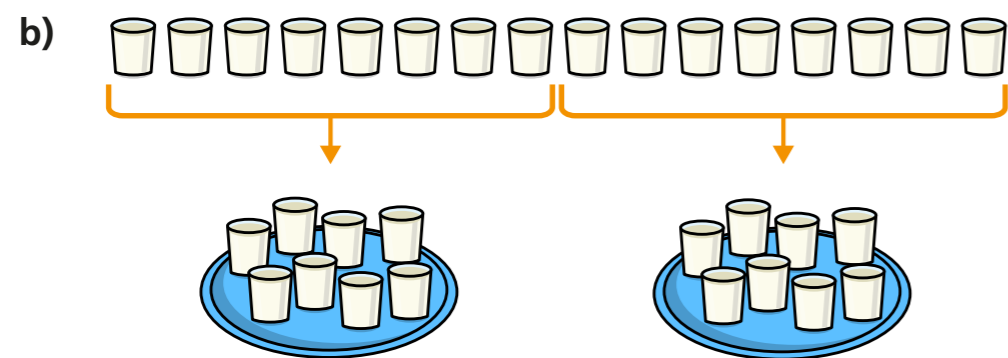


There are  flowers.

There are  vases.

Each vase has  flowers.

16 shared into  equal groups is



There are 16 glasses of milk.


There are  glasses of milk on each tray.

There are  trays.


16 shared into  equal groups is



2 Use the arrays to help you complete the divisions.  
Draw on the arrays to show your workings.




$$40 \div 8 = \square$$



$$40 \div 5 = \square$$

3 32 coins are shared between 8 people.  
How many coins does each person get?

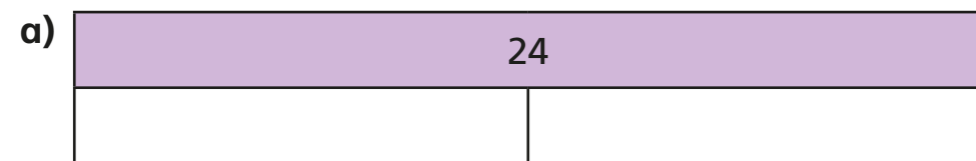


Complete the division.

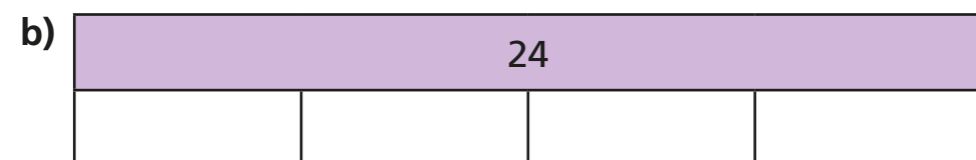
$$\square \div \square = \square$$



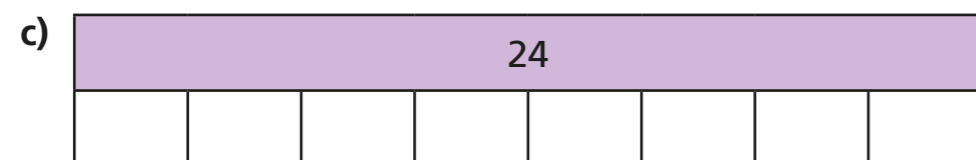
4 Complete the bar models and division statements.



$$\square \div \square = \square$$



$$\square \div \square = \square$$



$$\square \div \square = \square$$

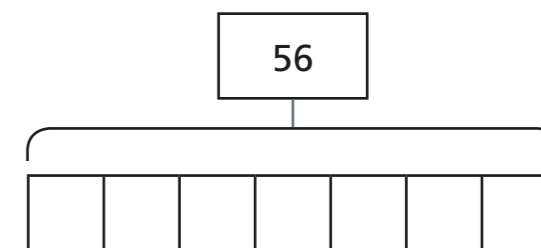
What do you notice?



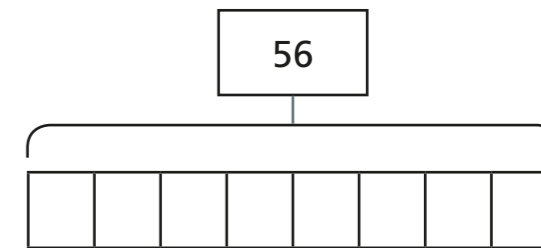
5 40 kg of potatoes are packed into 8 kg bags.  
How many 8 kg bags can be filled?

6 a) Match the number story to the bar model.

56 sweets are shared equally between 8 party bags.

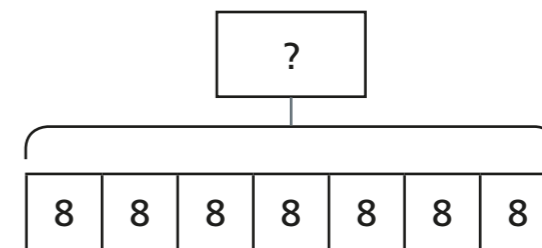


56 sweets are put into party bags. There are 8 sweets in each bag.



b) Complete the bar models.

c) Think of a number story to match this bar model.



7 Circle the numbers that divide by 8 exactly.

- 23    28    32    64    65

How did you work this out?

